

수학

유형1

색칠하기

10이 되는 짝궁 수를 알아봅시다.



왼쪽의 숫자만큼 오른쪽의 모양에 색칠해주세요.

○ ○ ○ ○ ● ● ● ● ● ●	$4+6=10$
◇ ◇ ◇ ◇ ◇ ◇ ◇ ◇ ◇ ◇	$8+2=10$
□ □ □ □ □ □ □ □ □ □	$5+5=10$
♡ ♡ ♡ ♡ ♡ ♡ ♡ ♡ ♡ ♡	$1+9=10$
😊 😊 😊 😊 😊 😊 😊 😊 😊 😊	$3+7=10$
☺ ☺ ☺ ☺ ☺ ☺ ☺ ☺ ☺ ☺	$2+8=10$
⚽ ⚽ ⚽ ⚽ ⚽ ⚽ ⚽ ⚽ ⚽ ⚽	$9+1=10$
⚾ ⚾ ⚾ ⚾ ⚾ ⚾ ⚾ ⚾ ⚾ ⚾	$2+8=10$

수학

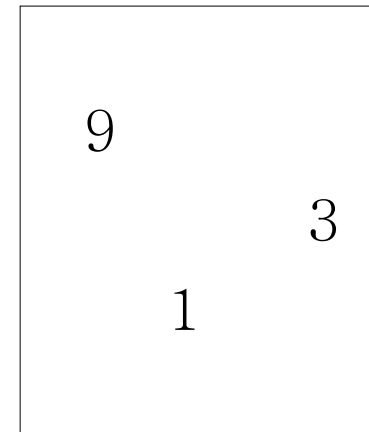
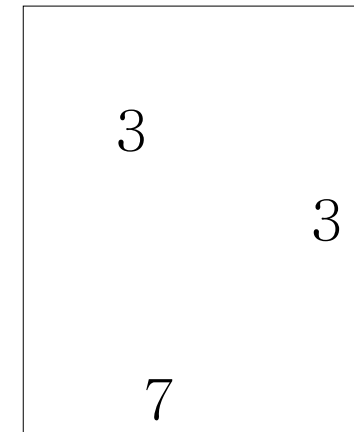
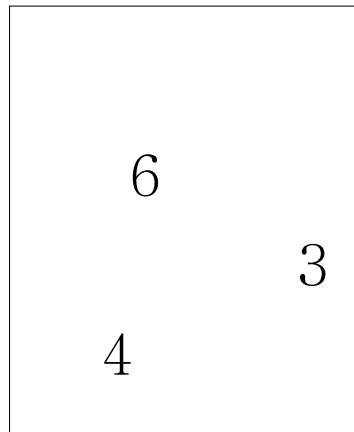
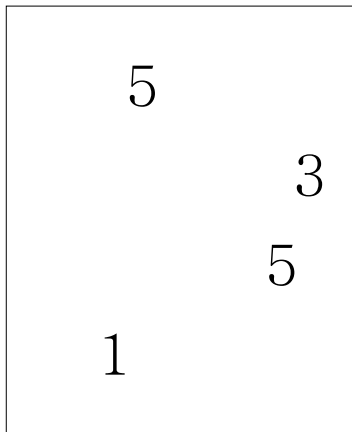
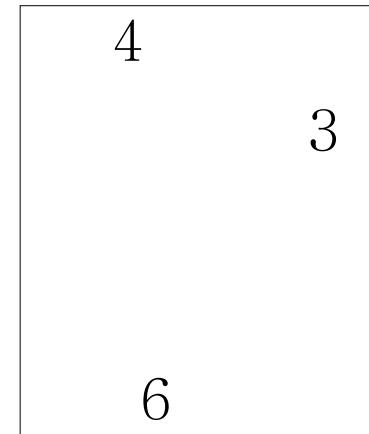
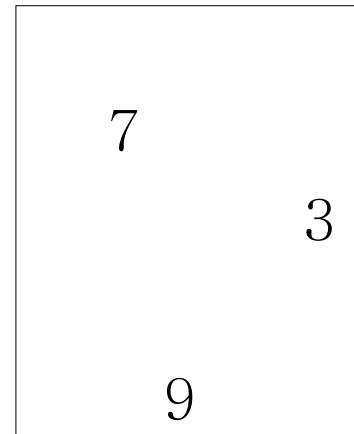
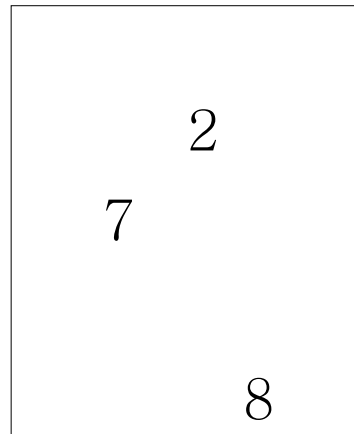
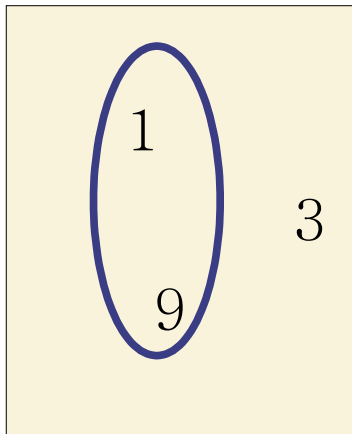
유형2

짝 지어주기

10이 되는 짝꿍 수를 알아봅시다.




10이 되는 두 수를 묶어주세요.



수학

유형3

무지개 그리기 10이 되는 짝꿍 수를 알아봅시다.



10이 되는 짝꿍 수를 연결하고, 색칠하여 무지개를 완성해 보세요.

