

직각삼각형을 알아볼까요

» 수학 40~41쪽

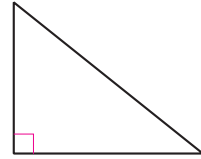
공부한 날



날

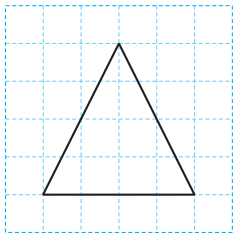
날

직각삼각형: 한 각이 직각인 삼각형

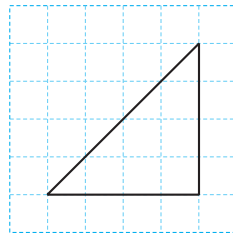


1 직각삼각형을 모두 찾아 ○표 하세요.

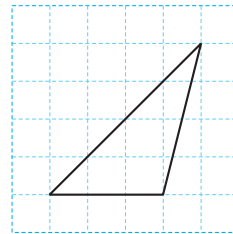
★★★



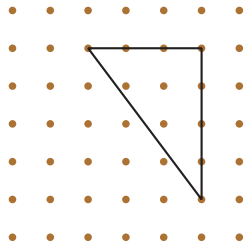
()



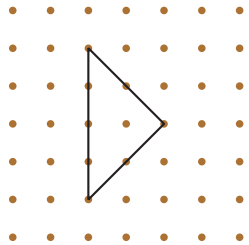
()



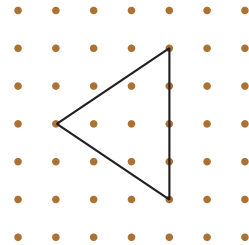
()



()



()



()

2 도형을 보고 표를 완성해 보세요.

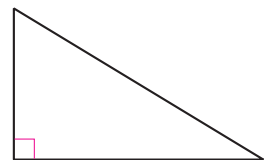
★★★

변의 수

꼭짓점의 수

각의 수

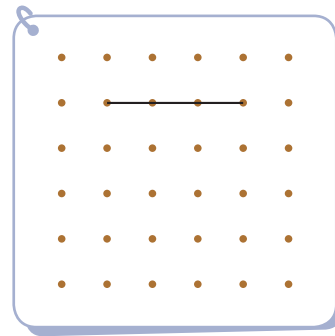

직각의 수



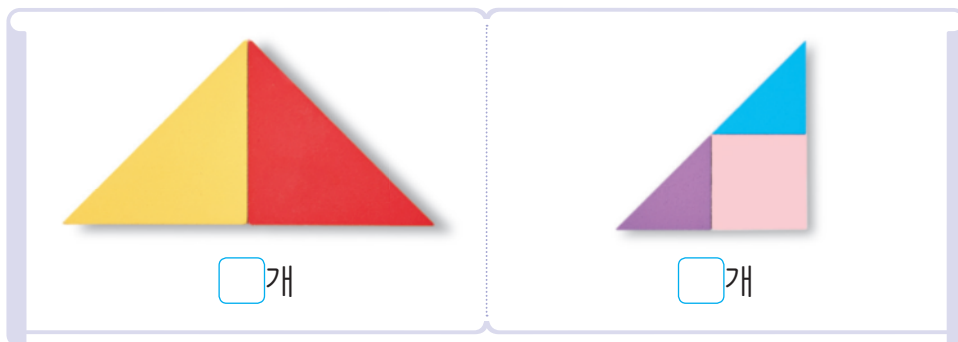
2

32

3 직각삼각형을 완성해 보세요.



4 칠교판으로 만든 모양에서 크고 작은 직각삼각형이 모두 몇 개인지 써 보세요.



5 다음 도형이 직각삼각형이 아닌 까닭을 써 보세요.

